

Name : _____

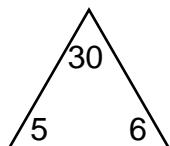
Score : _____

Teacher : _____

Date : _____

Complete Each Family of Facts

1)



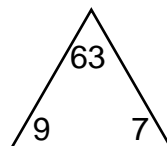
$$\square \times \square = \square$$

$$\square \times \square = \square$$

$$\square \div \square = \square$$

$$\square \div \square = \square$$

4)



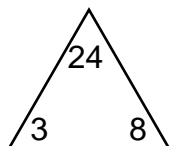
$$\square \times \square = \square$$

$$\square \times \square = \square$$

$$\square \div \square = \square$$

$$\square \div \square = \square$$

2)



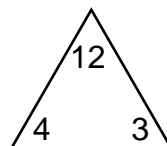
$$\square \times \square = \square$$

$$\square \times \square = \square$$

$$\square \div \square = \square$$

$$\square \div \square = \square$$

5)



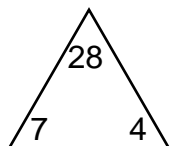
$$\square \times \square = \square$$

$$\square \times \square = \square$$

$$\square \div \square = \square$$

$$\square \div \square = \square$$

3)



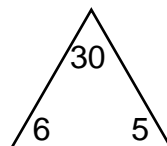
$$\square \times \square = \square$$

$$\square \times \square = \square$$

$$\square \div \square = \square$$

$$\square \div \square = \square$$

6)



$$\square \times \square = \square$$

$$\square \times \square = \square$$

$$\square \div \square = \square$$

$$\square \div \square = \square$$

Name : _____

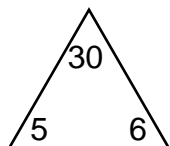
Score : _____

Teacher : _____

Date : _____

Complete Each Family of Facts

1)



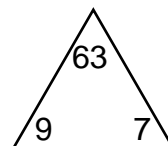
$$\boxed{5} \times \boxed{6} = \boxed{30}$$

$$\boxed{6} \times \boxed{5} = \boxed{30}$$

$$\boxed{30} \div \boxed{6} = \boxed{5}$$

$$\boxed{30} \div \boxed{5} = \boxed{6}$$

4)



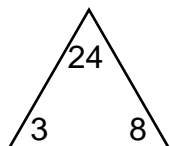
$$\boxed{9} \times \boxed{7} = \boxed{63}$$

$$\boxed{7} \times \boxed{9} = \boxed{63}$$

$$\boxed{63} \div \boxed{7} = \boxed{9}$$

$$\boxed{63} \div \boxed{9} = \boxed{7}$$

2)



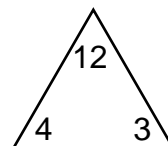
$$\boxed{3} \times \boxed{8} = \boxed{24}$$

$$\boxed{8} \times \boxed{3} = \boxed{24}$$

$$\boxed{24} \div \boxed{8} = \boxed{3}$$

$$\boxed{24} \div \boxed{3} = \boxed{8}$$

5)



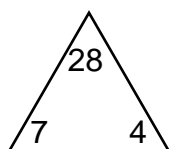
$$\boxed{4} \times \boxed{3} = \boxed{12}$$

$$\boxed{3} \times \boxed{4} = \boxed{12}$$

$$\boxed{12} \div \boxed{3} = \boxed{4}$$

$$\boxed{12} \div \boxed{4} = \boxed{3}$$

3)



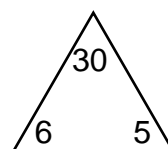
$$\boxed{7} \times \boxed{4} = \boxed{28}$$

$$\boxed{4} \times \boxed{7} = \boxed{28}$$

$$\boxed{28} \div \boxed{4} = \boxed{7}$$

$$\boxed{28} \div \boxed{7} = \boxed{4}$$

6)



$$\boxed{6} \times \boxed{5} = \boxed{30}$$

$$\boxed{5} \times \boxed{6} = \boxed{30}$$

$$\boxed{30} \div \boxed{5} = \boxed{6}$$

$$\boxed{30} \div \boxed{6} = \boxed{5}$$